




Tuesday 7th July

Good morning class 3

Tuesday 7th July

Spelling



Favourite

Potatoes

Straight

separate

Look for small words inside the blue words...

Favourite- favour/our/it

Potatoes-

Separate-

For the word **straight**, split it into sounds:
str/aight.

English

L.O. To add additional information to a sentence


Drop-in Game

Have a go at dropping extra information into a sentence using a relative clause that starts with *who*.

Read and complete page 13 of your 'All About Trolls' booklet'.

Remember to use a different colour for your drop- in information!

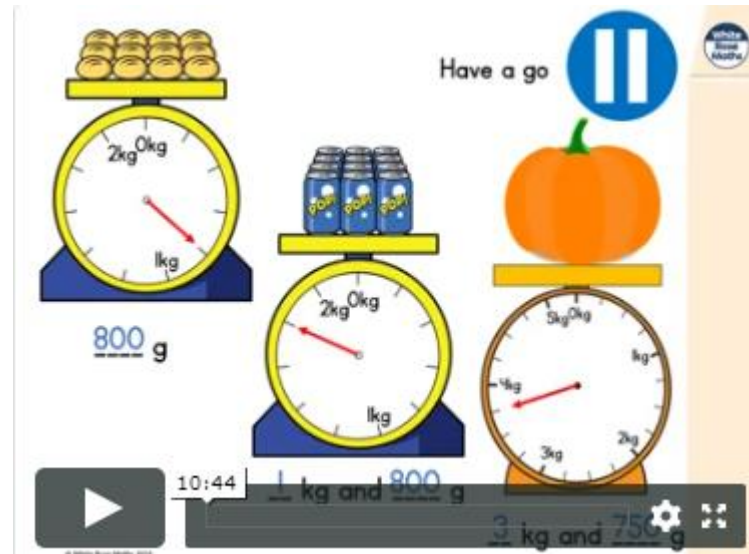
Mental Maths

1	Write the number 32 in the correct place on the grid.	<table><tr><td>17</td><td>18</td><td>19</td><td>20</td><td>21</td><td>22</td></tr><tr><td>23</td><td>24</td><td>25</td><td>26</td><td>27</td><td></td></tr><tr><td></td><td></td><td></td><td></td><td></td><td></td></tr><tr><td></td><td></td><td></td><td></td><td></td><td></td></tr></table>	17	18	19	20	21	22	23	24	25	26	27													
17	18	19	20	21	22																					
23	24	25	26	27																						
2	Work out the sum of 13 and 7.																									
3	Ben arrives at the park at ten o'clock. He leaves at eleven o'clock. How many minutes does he spend at the park?																									
4	Think of an even number which is more than 10 and less than 25.																									
5	How many sides does an octagon have?																									
6	Kelly has one pound. She spends twenty-five pence. How much money does she have left?																									
7	Sam's school starts at 9 o'clock. Sam went to the dentist and got to school half an hour late. Draw the time Sam got to school on the clock.																									
8	What is the difference between twelve and eighteen?																									
9	Five is a quarter of a number. What is the number?																									
10	There are fifty-four children on the bus. Nineteen get off. How many are left on the bus?																									

Maths

L.O. To compare mass

Click on the link below, or go to <https://whiterosemaths.com/homelearning/year-3/>
<https://vimeo.com/434622998>



Watch the video and pause to answer the questions....

Complete the worksheet on the class page- **Comparing Mass.**



Answers will be posted tomorrow.