





Friday 22nd May

Flashback Friday...

Here are some questions about the different things I have covered so far while you have been learning at home.

How many minutes are in an hour?	What day comes after Tuesday? Can you spell it?
 <p>What time is showing on these clocks?</p>	<p>Which is longest?</p> 
<p>Say the next three numbers:</p> <p>24, 25, 26, _ , _ , _</p> <p>2, 4, 6, 8, _ , _ , _</p>	<p>My shape has 6 faces. Two of the faces are square. Four of the faces are rectangular. My shape has 8 corners.</p> <p>What shape am I thinking of?</p>
<p>Describe this array:</p> 	<p>What is half of 18?</p>
<p>How much of this shape is coloured?</p> 	<p>Double these numbers:</p> <p>6, 3, 8, 5</p>

If there is anything in the flashback that your child finds particularly tricky please let me know and I will try to suggest a resource or activity.

Today's home learning activity:

I have added some money sheets to the class page. I've tried to name the documents in order that you can select the appropriate level for your child.

Mrs White