

Year 1 Maths Activity Mat

①


Section 1

Put in the missing numbers.

31		33		35		37		39
----	--	----	--	----	--	----	--	----

Section 2

How many lollies are there altogether?



Section 3

What's the missing number?

$$20 - \square = 17$$




Section 4

Which snake is the shortest?



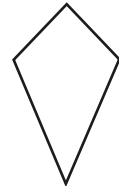
Section 5

Two dogs have 8 biscuits altogether. They each had the same amount. How many biscuits did each dog have?



Section 6

Colour half of these shapes.



Section 7

Circle the even numbers.

32

51

37

48

66

Section 8

$$20 + \square = 29$$



$$15 + \square = 21$$



Year 1 Maths Activity Mat: 1

Answers


Section 1

Put in the missing numbers.

31	32	33	34	35	36	37	38	39
----	----	----	----	----	----	----	----	----

Section 2

How many lollies are there altogether?



12

Section 3

What's the missing number?

$$20 - \boxed{3} = 17$$



Section 4

Which snake is the shortest?



A



B




C

A

Section 5


Two dogs have 8 biscuits altogether. They each had the same amount. How many biscuits did each dog have?



4

Section 6

Colour half of these shapes.



Section 7

Circle the even numbers.

32

51

37

48

66

Section 8

$$20 + \boxed{9} = 29$$



$$15 + \boxed{6} = 21$$

