

Friday 27<sup>th</sup> March

Today I would like you to log onto Active Learn and complete one of the maths activities that I have allocated to you. I can see that some of you have already been working on Active Learn, I hope you have enjoyed the games so far.



I have allocated a couple of measure activities for everyone which would be a good thing for you to try today after the amazing stick measuring that you did yesterday (thanks for all the photos of your super work – the sticks looked fantastic).

If you have any problems logging onto Active Learn please email me at [yearone@greatchesterford.essex.sch](mailto:yearone@greatchesterford.essex.sch) and I will check your login details. If we can't get you logged in, or you don't have access to the internet or a device to use please do some practical measuring around the house with a ruler, measuring tape or small toys that are a similar size.


**obacus Mastery Checkpoint**

**Have you mastered comparing and measuring lengths and heights?**

a) Write how many cubes long each item is. Draw the one that is not longest or shortest.




b) Which creature is shorter, the mouse or the snake?



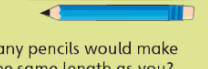
c) Roughly how many slippers would you use to measure the height of a classroom table?

**Champions' Challenge**

1. What colour is the longer pencil?



2. How many pencils would make a line the same length as you? Make an estimate.



Year 1 Mastery Checkpoint 7 Week 8



**Have a lovely weekend Class One!**