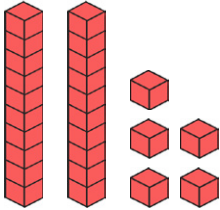


# Year 1 Maths Activity Mat

⑥

## Section 1

Write the number in the box.



## Section 2

Can I buy the sunglasses?



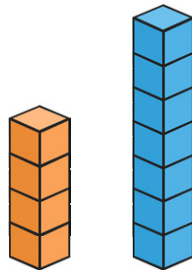
## Section 3

What numbers come next?

10	9	8			
----	---	---	--	--	--

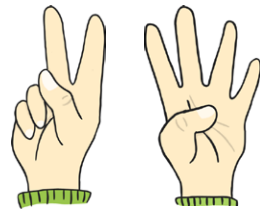
## Section 4

How many cubes taller is the blue tower than the orange tower?



## Section 5

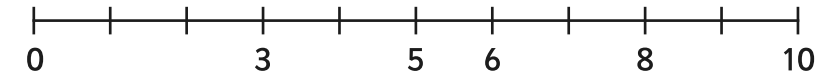
How many fingers are there?



## Section 6

Put these numbers on the number line.

9      4      2      1      7



## Section 7

9 is 1 more than

6 is 1 more than


## Section 8

Archie has 3 sausages on his plate.

He eats one.

How many are left?

Write a number sentence so show this.

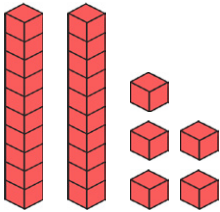


# Year 1 Maths Activity Mat: 6

## Answers

### Section 1

Write the number in the box.



25

### Section 2

Can I buy the sunglasses?



yes

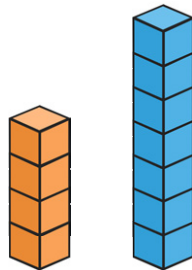
### Section 3

What numbers come next?

10	9	8	7	6	5
----	---	---	---	---	---

### Section 4

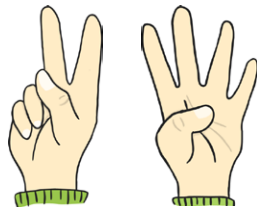
How many cubes taller is the blue tower than the orange tower?



3

### Section 5

How many fingers are there?

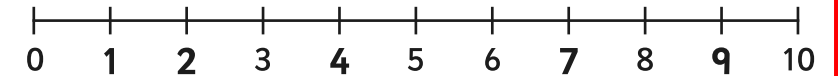


6

### Section 6

Put these numbers on the number line.

9      4      2      1      7



### Section 7

9 is 1 more than

8

6 is 1 more than

5


### Section 8

Archie has 3 sausages on his plate.

He eats one.

How many are left?

Write a number sentence so show this.



$3 - 1 = 2$