

Thursday 2nd April

Good morning Class 4. I hope that you're all well.

The following slides cover the home learning tasks for today. Don't forget to include the date and learning objective on your work. If you have any questions or would just like to let us know what you've been doing to keep yourself busy, please email:

Year4@greatchesterford.essex.sch.uk

I gave in yesterday and did some baking. Mint chocolate cookies – very nice! Has anyone else been baking?

Happy home learning!

Maths

First, mark your work from yesterday.

Then, complete the maths warm up before completing today's work on calculating perimeters.

LO: To calculate the perimeter of given shapes.

The answers will be posted tomorrow.

If you need a reminder about calculating perimeter, watch this short clip:

<https://www.bbc.co.uk/bitesize/topics/zvmxsbk/articles/zsr4k7h>

Maths

Answers from Wednesday 1st April

251, 351, 451, 551, 651, 751	24, 30, 36, 42, 48, 54
345, 1345, 2345, 3345, 4345, 5345	27, 36, 45, 54, 63, 72
25, 50, 75, 100, 125, 150	63, 70, 77, 84, 91, 98
3487, 3477, 3467, 3457, 3447, 3437	123, 114, 105, 96, 87, 78

The clues should have revealed the number 64.

Maths warm up

To get your brain into gear, have a go at these questions.

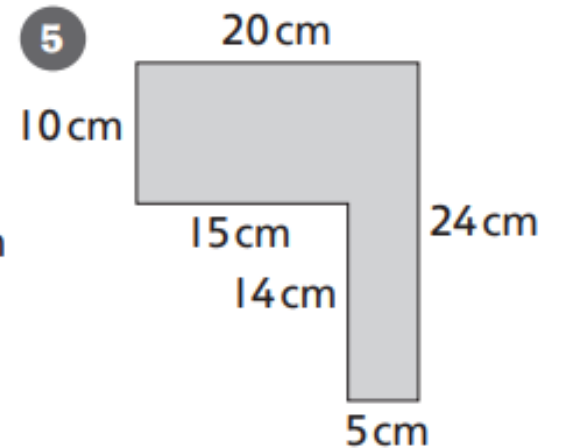
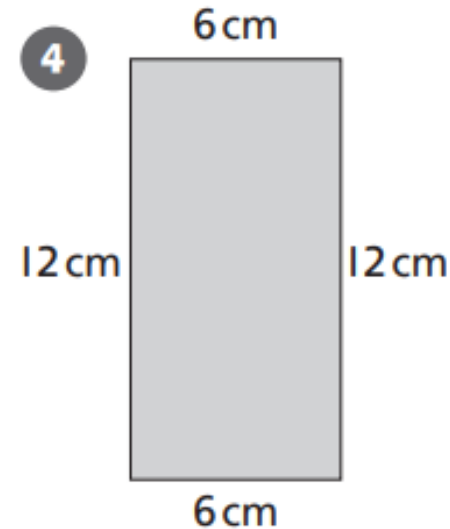
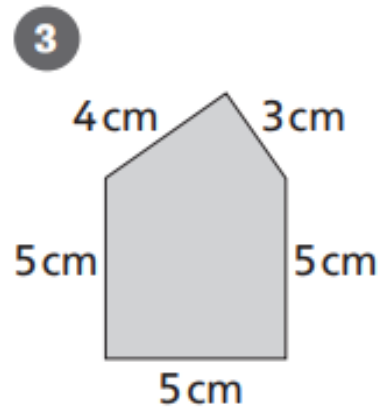
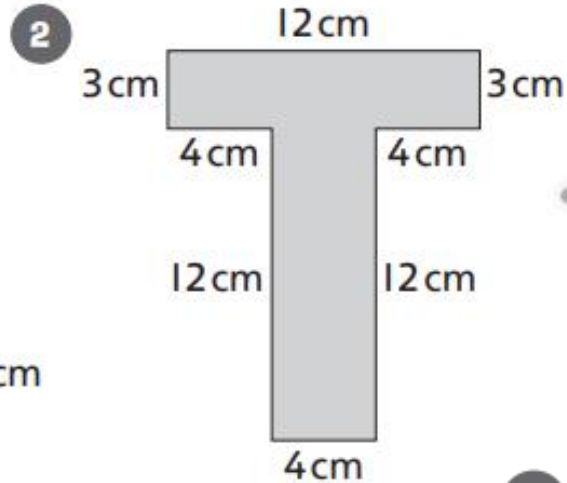
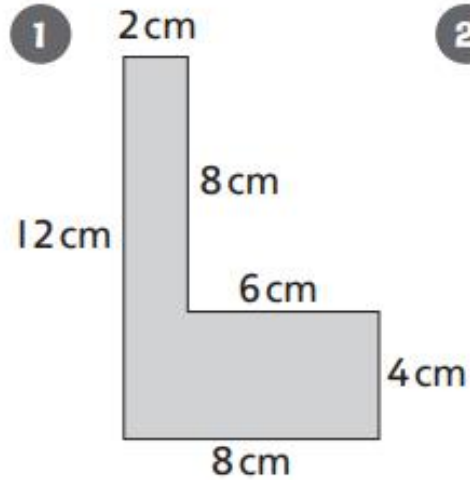
Answers will be given tomorrow.

$5 \div 1 =$	$\frac{3}{10} + \frac{6}{10} =$
$\underline{\hspace{2cm}} = 120 \times 0$	$\frac{1}{3} \text{ of } 18 =$
$68 \times 1 =$	$8 \times 9 =$
$\underline{\hspace{2cm}} = 6 \times 3$	$542 - 242 =$
$70 \times 2 = \underline{\hspace{2cm}}$	$450 \div 9 =$

LO: To calculate the perimeter of given shapes.

Shape up!

Write the name of each shape and calculate its perimeter.



English

First, copy out a full line of your weekly spellings (**purpose, quarter, sentence, therefore**). Remember they need to be spelt correctly and you must join your handwriting.

LO: To answer questions from a text.

Read the Victorious Viking fact sheet on our class page.

In your home learning books, try to answer these questions:

1. When did the Vikings first arrive in Britain?
2. Why did the Vikings choose to come to Britain?
3. What is a monastery?
4. Which monastery did the Vikings raid first? What happened?
5. Why did the Vikings begin to settle permanently in Britain? Find two reasons.
6. Which city did the Vikings take over in AD 866?
7. Who was King Alfred the Great and what did he do?
8. Give two reasons why the Vikings made good warriors?
9. If you were a Viking warrior, which weapon would you choose? Why?
10. Where did Viking warriors believe they went if they died in battle?

Answers will be given tomorrow.