

Year 1 Maths Activity Mat

②

Section 1

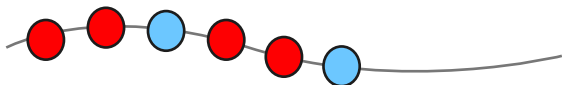
Fill in the boxes to show how many flowers there are altogether.



$$\square + \square = \square$$

Section 2

Draw and colour the next 3 beads in the pattern.



Section 3

What day will it be tomorrow? Circle the correct day.



Saturday

Sunday

Monday

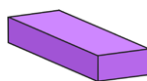
Section 4

How many legs do you see?



Section 5

How many of each shape are there?



sphere =

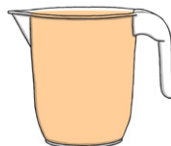
cuboid =

Section 6

Match up the words which describe the jugs.




full



half full


Section 7

Draw the hands on the clock to show 7 o'clock.



Section 8

Draw the coins that I need to buy the toy.



Year 1 Maths Activity Mat: 2

Answers

Section 1

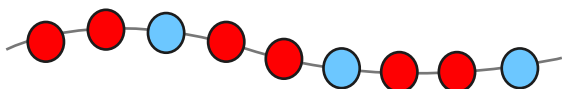
Fill in the boxes to show how many flowers there are altogether.



$$\boxed{5} + \boxed{3} = \boxed{8}$$

Section 2

Draw and colour the next 3 beads in the pattern.



Section 3

What day will it be tomorrow? Circle the correct day.



Saturday

Sunday

Monday

Section 4

How many legs do you see?



8

Section 5

How many of each shape are there?



sphere =

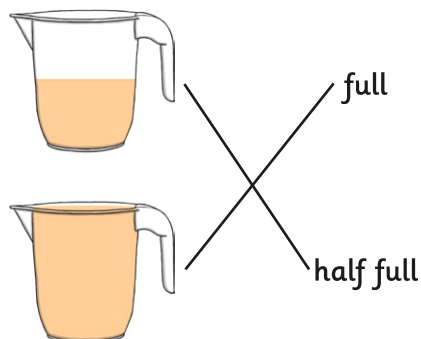
2

cuboid =

1


Section 6

Match up the words which describe the jugs.




Section 7

Draw the hands on the clock to show 7 o'clock.



Section 8

Draw the coins that I need to buy the toy.



example:

