

Year 1 Maths Activity Mat

②

Section 1

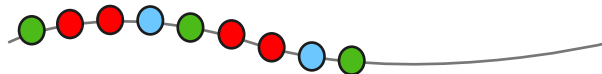
Draw 4 more flowers. Fill in the boxes to show how many flowers there are altogether.



$$\square + \square = \square$$

Section 2

Draw and colour the next 5 beads in the pattern.



Section 3

What will it show in 2 days' time? Circle the correct date.



Sunday
June 11th

Monday
June 12th

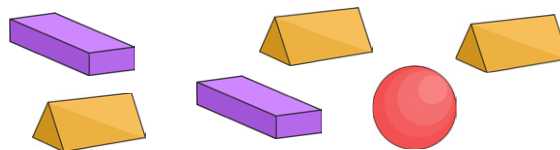
Tuesday
June 13th

Section 4

You are at the zoo. You look into the giraffe area. You see 12 legs. How many giraffes are in there?

Section 5

How many of each shape are there?



triangular prism = sphere =

cuboid =

Section 6

Colour the jugs to make their labels correct.



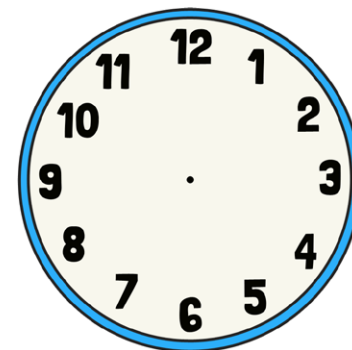
full



half full


Section 7

Draw the hands on the clock to show quarter past 11.



Section 8

Draw the coins that I need to buy the toy.



Year 1 Maths Activity Mat: 2

Answers

Section 1

Draw 4 more flowers. Fill in the boxes to show how many flowers there are altogether.



$$\boxed{8} + \boxed{4} = \boxed{12}$$

Section 2

Draw and colour the next 5 beads in the pattern.



Section 3

What will it show in 2 days' time? Circle the correct date.



Sunday
June 11th

Monday
June 12th

Tuesday
June 13th

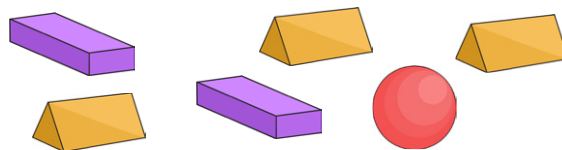
Section 4

You are at the zoo. You look into the giraffe area. You see 12 legs. How many giraffes are in there?

3

Section 5

How many of each shape are there?




triangular prism =

sphere =

cuboid =

Section 6

Colour the jugs to make their labels correct.




full



half full


Section 7

Draw the hands on the clock to show quarter past 11.



Section 8

Draw the coins that I need to buy the toy.



example:

